


# RÄKNEHÄFTE


Namn: \_\_\_\_\_

# ADDERA FISKAR


Rita till fiskar i skålarna och räkna additionerna



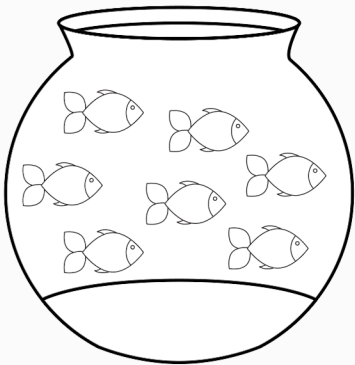
$$3 + 2 =$$



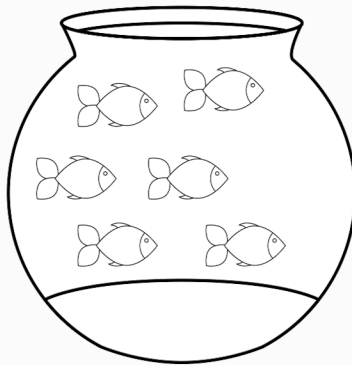
$$5 + 1 =$$



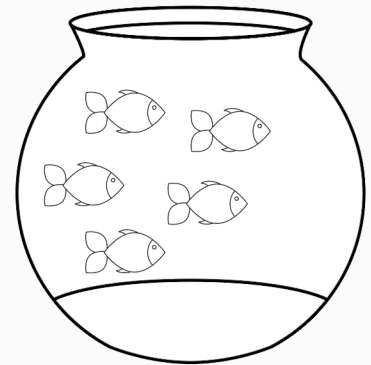
$$2 + 2 =$$



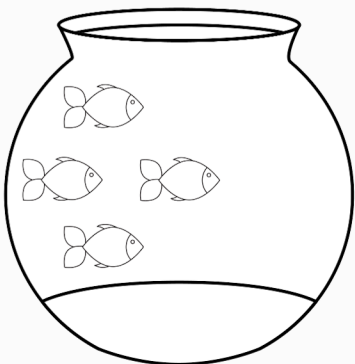
$$7 + 1 =$$



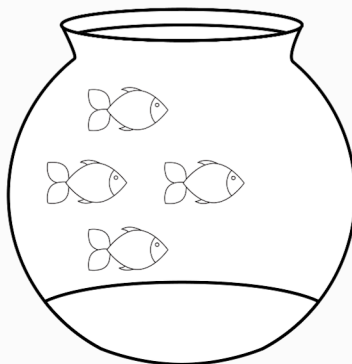
$$6 + 4 =$$



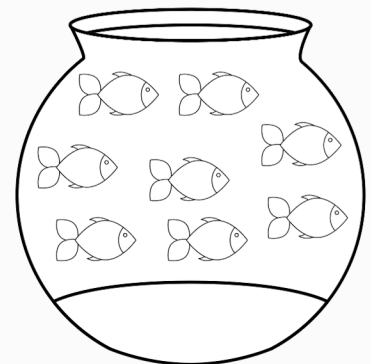
$$5 + 3 =$$



$$4 + 4 =$$



$$4 + 3 =$$

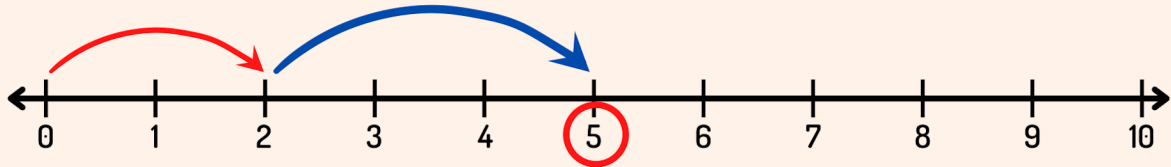


$$8 + 2 =$$

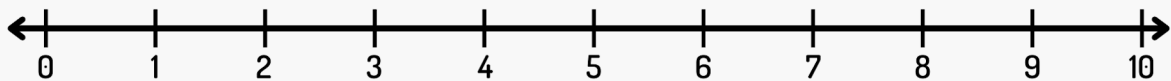
# ADDITION PÅ TALLINJEN

Räkna genom att hoppa på tallinjen.

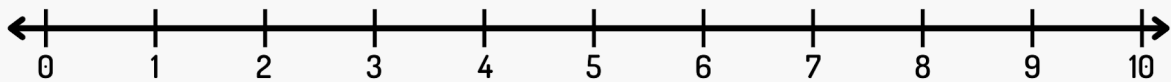
$$2 + 3 = \boxed{5}$$



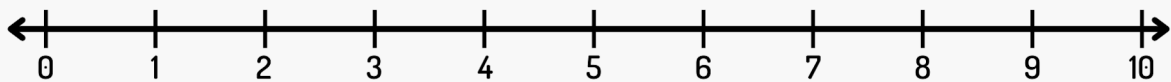
$$4 + 3 = \boxed{\phantom{00}}$$



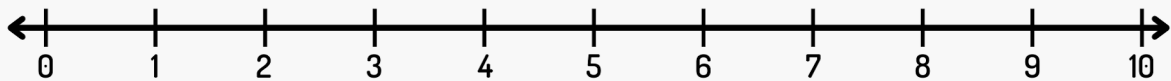
$$5 + 4 = \boxed{\phantom{00}}$$



$$6 + 3 = \boxed{\phantom{00}}$$



$$8 + 1 = \boxed{\phantom{00}}$$



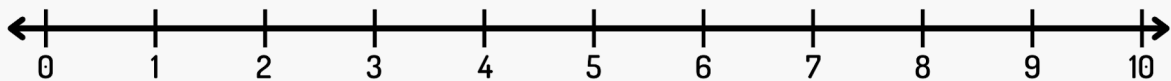
# SUBTRAKTION PÅ TALLINJEN

Räkna genom att hoppa på tallinjen

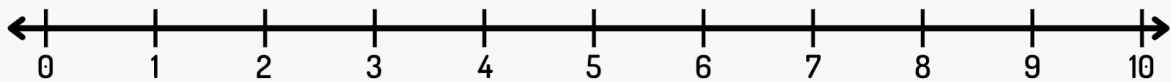
$$3 - 2 = \boxed{1}$$



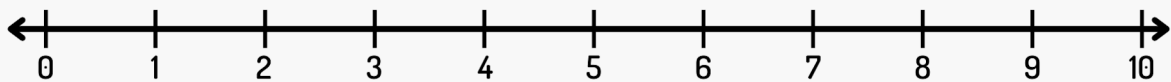
$$7 - 3 = \boxed{\phantom{0}}$$



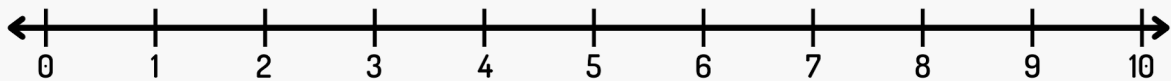
$$5 - 4 = \boxed{\phantom{0}}$$



$$6 - 3 = \boxed{\phantom{0}}$$



$$8 - 1 = \boxed{\phantom{0}}$$



# ADDITION 0-10



$1 + 5 = \underline{\quad}$

$4 + 3 = \underline{\quad}$

$6 + 2 = \underline{\quad}$

$1 + 3 = \underline{\quad}$

$2 + 7 = \underline{\quad}$

$4 + 4 = \underline{\quad}$

$0 + 9 = \underline{\quad}$

$4 + 2 = \underline{\quad}$

$2 + 2 = \underline{\quad}$

$3 + 3 = \underline{\quad}$

$1 + 6 = \underline{\quad}$

$1 + 2 = \underline{\quad}$

$6 + 3 = \underline{\quad}$

$9 + 7 = \underline{\quad}$

$9 + 1 = \underline{\quad}$

$7 + 2 = \underline{\quad}$

$4 + 4 = \underline{\quad}$

$8 + 2 = \underline{\quad}$

$1 + 6 = \underline{\quad}$

$2 + 4 = \underline{\quad}$

$2 + 5 = \underline{\quad}$

$5 + 2 = \underline{\quad}$

$0 + 3 = \underline{\quad}$

$2 + 0 = \underline{\quad}$

$2 + 8 = \underline{\quad}$

$10 + 0 = \underline{\quad}$

$1 + 9 = \underline{\quad}$

$3 + 2 = \underline{\quad}$

$7 + 3 = \underline{\quad}$

$9 + 0 = \underline{\quad}$

$2 + 4 = \underline{\quad}$

$8 + 0 = \underline{\quad}$

$1 + 3 = \underline{\quad}$

$1 + 9 = \underline{\quad}$

$4 + 2 = \underline{\quad}$

$4 + 3 = \underline{\quad}$

$2 + 1 = \underline{\quad}$

$5 + 2 = \underline{\quad}$

$6 + 2 = \underline{\quad}$

$3 + 6 = \underline{\quad}$

$1 + 5 = \underline{\quad}$

$3 + 6 = \underline{\quad}$

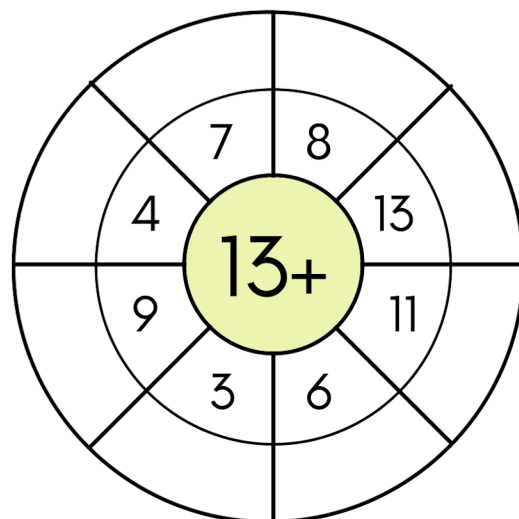
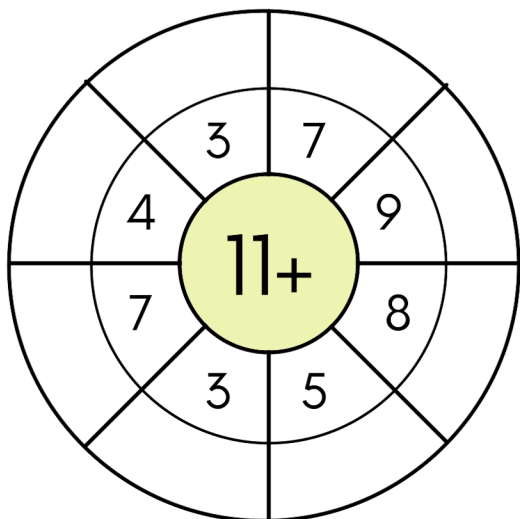
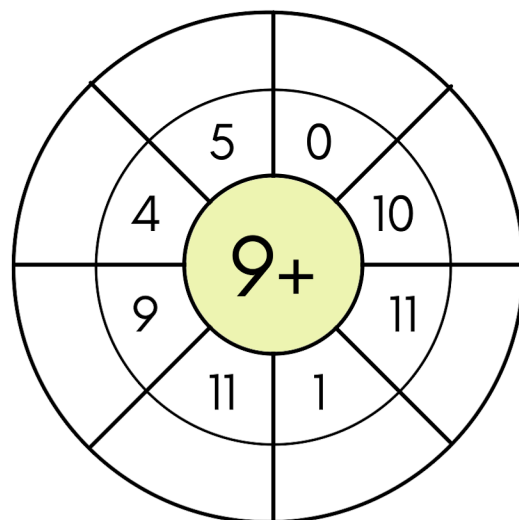
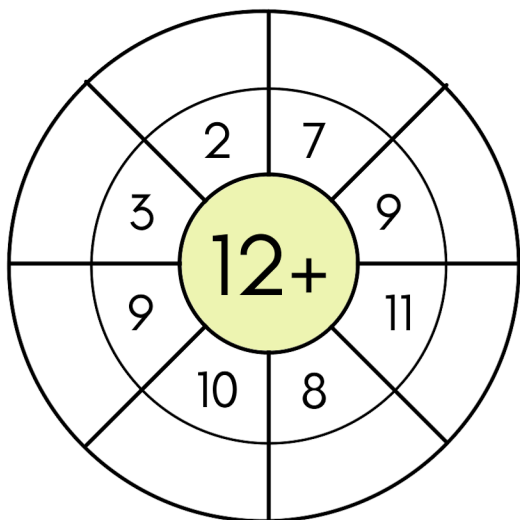
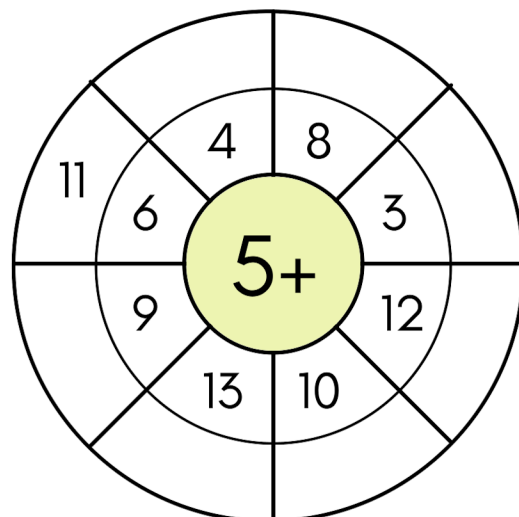
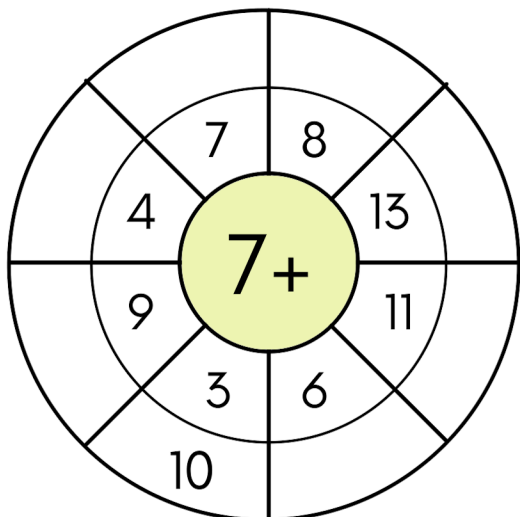
$4 + 6 = \underline{\quad}$

$2 + 2 = \underline{\quad}$

$1 + 5 = \underline{\quad}$

# ADDITIONS

Räkna och fyll i de tomma fälten i hjulen










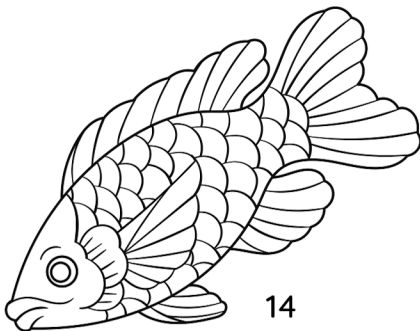
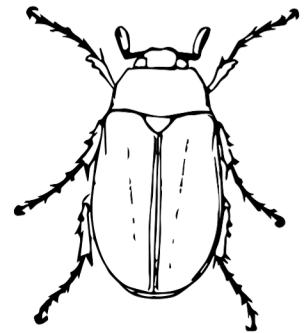





# RÄKNA TILL 100



1		3	4	5	6		8	9	
11	12	13		15	16		18		20
21		23	24			27		29	30
	32		34		36		38		40
41		43		45		47		49	
	52	53				57	58		60
61		63		65	66		68	69	
	72			75		77	78		80
81	82			85			88	89	
	92		94		96	97		99	

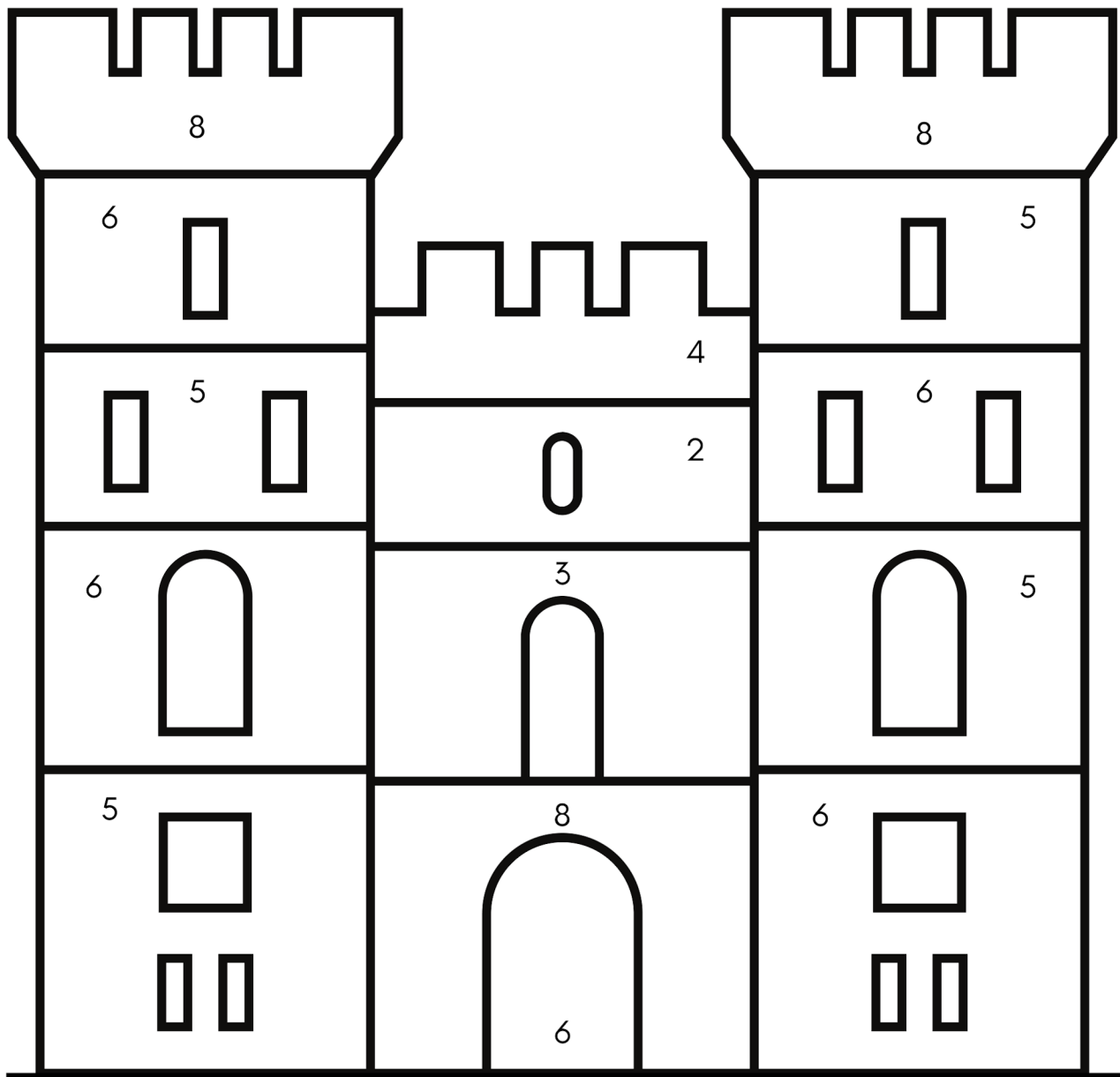
# JÄMNA TAL


Färglägg alla djur som har ett jämnt tal





# RÄKNEMÅLA



$10 - 5 =$   Rosa

$5 - 2 =$   Blå

$10 - 2 =$   Gul

$16 - 4 =$   Orange

$9 - 3 =$   Grön

$8 - 4 =$   Lila