



RÄKNA MED SPÖKEN



Namn: _____

Skriv talen i rätt ordning. Börja med det minsta talet.



185, 56, 137, 44

-----, -----, -----, -----

123, 491, 169, 229

-----, -----, -----, -----

476, 82, 227, 68

-----, -----, -----, -----

999, 891, 909, 889

-----, -----, -----, -----

555, 597, 513, 567

-----, -----, -----, -----

212, 412, 527, 461

-----, -----, -----, -----

276, 547, 555, 673

-----, -----, -----, -----

897, 586, 665, 569

-----, -----, -----, -----

542, 776, 545, 482

-----, -----, -----, -----

834, 513, 631, 823

-----, -----, -----, -----

885, 687, 479, 655

-----, -----, -----, -----








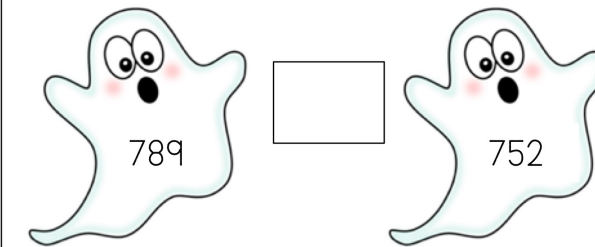

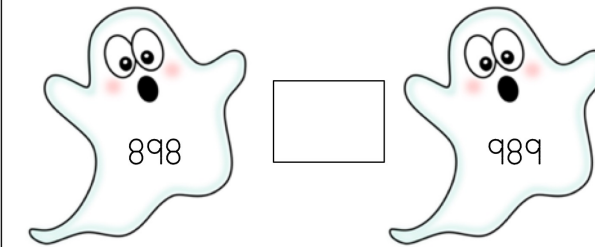
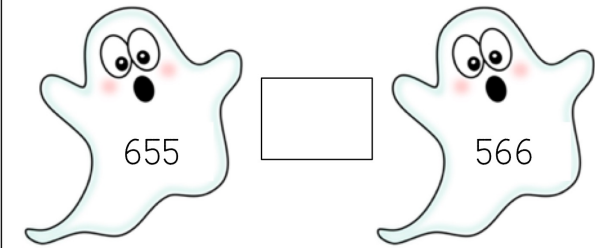
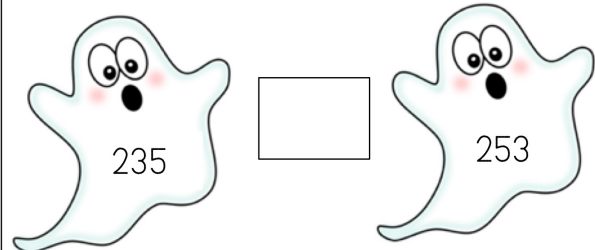
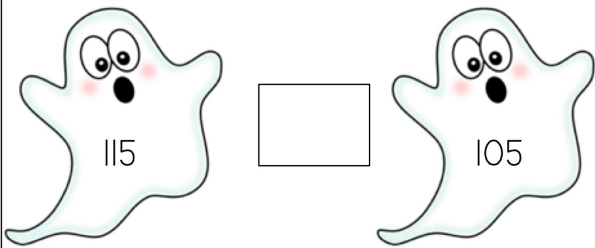

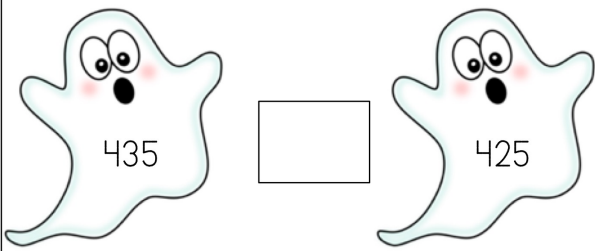
354, 482, 635, 632

-----, -----, -----, -----

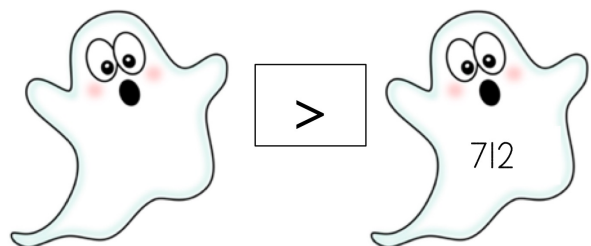
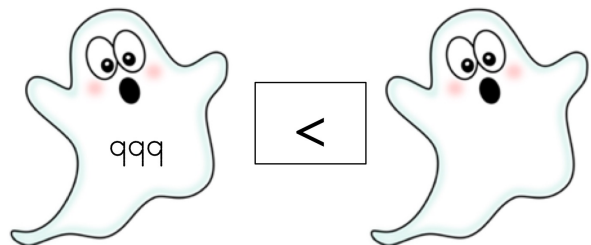
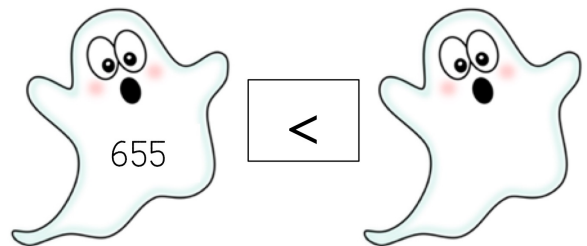
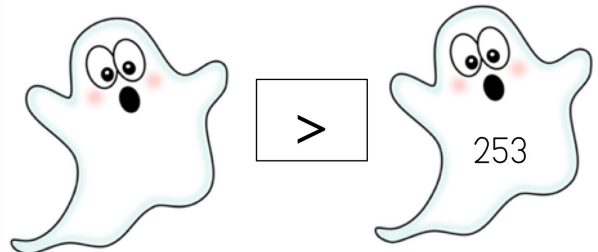
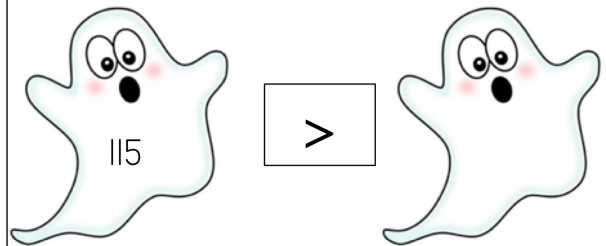
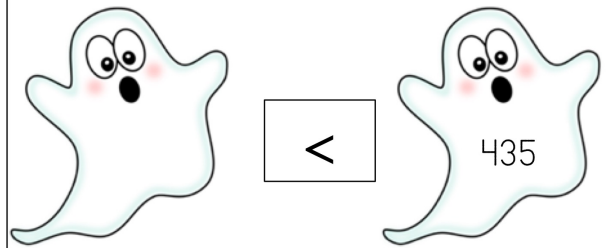
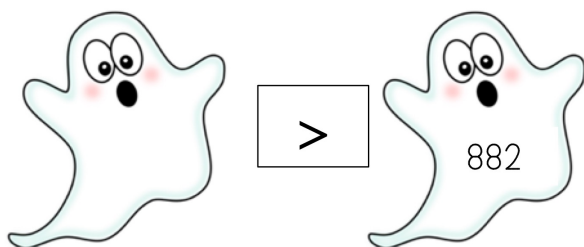
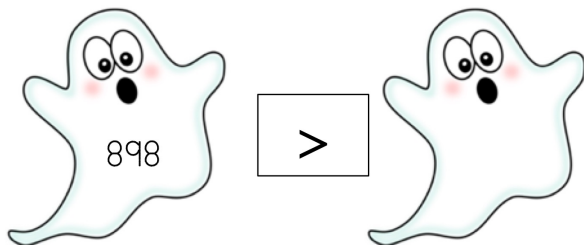
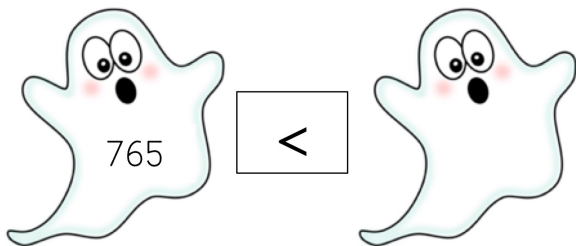
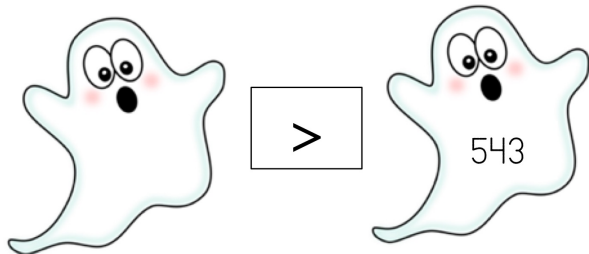
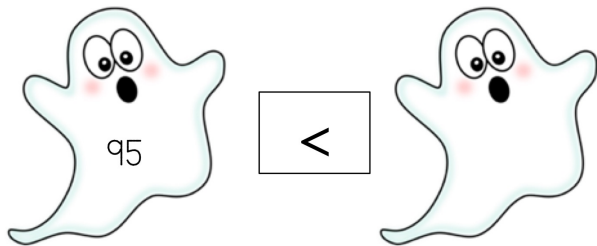
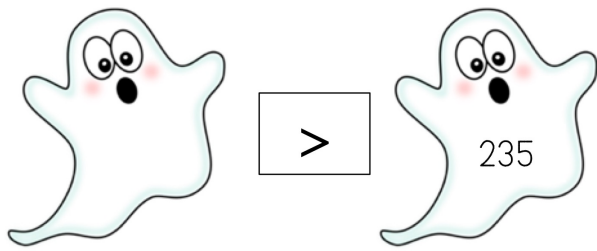
Vilket tal är störst? Sätt ut rätt tecken.

>

<



Fyll i ett tal så att uttrycken stämmer.



Fyll i rätt tecken så att uttrycket stämmer.

>

<



$$600 + 50 + 9 \quad \square \quad 600 + 40 + 5$$

$$800 + 50 + 8 \quad \square \quad 700 + 20 + 4$$

$$500 + 70 + 4 \quad \square \quad 600 + 60 + 9$$

$$400 + 80 + 2 \quad \square \quad 900 + 70 + 7$$

$$700 + 40 + 5 \quad \square \quad 700 + 30 + 9$$

$$500 + 80 + 3 \quad \square \quad 400 + 90 + 5$$

$$300 + 90 + 2 \quad \square \quad 500 + 10 + 2$$

$$200 + 20 + 4 \quad \square \quad 200 + 60 + 4$$

$$600 + 80 + 8 \quad \square \quad 600 + 90 + 4$$

$$500 + 90 + 7 \quad \square \quad 500 + 60 + 4$$

$$800 + 10 + 3 \quad \square \quad 800 + 30 + 9$$



Fyll i talen i tabellen.



tal	10 mer	10 mindre	100 mer	100 mindre
674				
380				
189				
432				
954				
806				
532				
678				
798				
456				
378				
167				

Skriv talen i utvecklad form.

$576 = \text{-----} + \text{-----} + \text{-----}$	$742 = \text{-----} + \text{-----} + \text{-----}$
$387 = \text{-----} + \text{-----} + \text{-----}$	$841 = \text{-----} + \text{-----} + \text{-----}$
$245 = \text{-----} + \text{-----} + \text{-----}$	$906 = \text{-----} + \text{-----} + \text{-----}$
$693 = \text{-----} + \text{-----} + \text{-----}$	$666 = \text{-----} + \text{-----} + \text{-----}$
$473 = \text{-----} + \text{-----} + \text{-----}$	$503 = \text{-----} + \text{-----} + \text{-----}$
$211 = \text{-----} + \text{-----} + \text{-----}$	$492 = \text{-----} + \text{-----} + \text{-----}$
$670 = \text{-----} + \text{-----} + \text{-----}$	$372 = \text{-----} + \text{-----} + \text{-----}$
$893 = \text{-----} + \text{-----} + \text{-----}$	$186 = \text{-----} + \text{-----} + \text{-----}$
$704 = \text{-----} + \text{-----} + \text{-----}$	$247 = \text{-----} + \text{-----} + \text{-----}$



Vilket tal är det?

$200 + 90 + 7 = \text{-----}$	$800 + 70 + 1 = \text{-----}$
$100 + 80 + 3 = \text{-----}$	$300 + 30 + 4 = \text{-----}$
$500 + 60 + 6 = \text{-----}$	$100 + 20 + 3 = \text{-----}$
$800 + 40 + 2 = \text{-----}$	$700 + 90 + 5 = \text{-----}$
$700 + 30 + 5 = \text{-----}$	$300 + 40 + 9 = \text{-----}$
$600 + 10 + 8 = \text{-----}$	$800 + 30 + 0 = \text{-----}$
$300 + 40 + 3 = \text{-----}$	$600 + 50 + 1 = \text{-----}$
$400 + 20 + 2 = \text{-----}$	$400 + 60 + 6 = \text{-----}$
$200 + 90 + 0 = \text{-----}$	$900 + 70 + 7 = \text{-----}$



Skriv talen med siffror.



tvåhundra trettio två -----

fyrhundra åttio -----

trehundra fyrtio sex -----

etthundra trettio två -----

åttahundra elva -----

sjuhundra nittio tre -----

sexhundra åttio sju -----

niohundra femtio fem -----

trehundra nio -----

femhundra fyrtio sju -----

sjuhundra tjugotvå -----

etthundra åttio fem -----

trehundra sjuttio -----

fyrhundra tjugosju -----

femhundra femtio fem -----

niohundra sju -----

åttahundra trettio två -----

sexhundra sjuttio -----

sjuhundra trettio fem -----

etthundra ett -----

trehundra femton -----


sjuhundra tjugo -----



Skriv talet som kommer efter.



346	
657	
289	
499	
732	
509	



999	
169	
376	
888	
164	
650	

Skriv talet som kommer före.



	764
	299
	403
	658
	529
	731



	510
	700
	225
	619
	300
	898

Fortsätt på talmönstret.



685, 690, 695, _____, _____, _____, _____

533, 543, 553, _____, _____, _____, _____

895, 890, 885, _____, _____, _____, _____

693, 683, 672, _____, _____, _____, _____

772, 774, 776, _____, _____, _____, _____

551, 553, 555, _____, _____, _____, _____

399, 397, 395, _____, _____, _____, _____

220, 224, 228, _____, _____, _____, _____

431, 435, 739, _____, _____, _____, _____

722, 725, 728, _____, _____, _____, _____

Fortsätt på talmönstret.



870, 880, 890, _____, _____, _____, _____

346, 446, 546, _____, _____, _____, _____

725, 750, 775, _____, _____, _____, _____

120, 140, 160, _____, _____, _____, _____

430, 450, 470, _____, _____, _____, _____

555, 655, 755, _____, _____, _____, _____

990, 980, 970, _____, _____, _____, _____

887, 885, 883, _____, _____, _____, _____

605, 610, 615, _____, _____, _____, _____

960, 860, 760, _____, _____, _____, _____

Måla siffror för hundratal gula, siffror för tiotal blåa och siffror för ental röda.

128

987

652

430

226

503

781


337

611


473

543

Dra streck mellan rätt tal, från siffror till bokstäver.




sjuhundra sextiosju




åttahundra femtionio




niohundra nio




sexhundra sjuttioåtta




sexhundra tre




tvåhundra sjutton




sexhundra trettio två



åttahundra sextioett




trehundra fyrtio



trehundra fyrtionio



sjuhundra åttiofem



ettundra tjugotre

Fyll i talen som saknas i hundrarutan.



1	2		4	5			8	9	
11		13			16		18		
	22		24	25		27		29	
31			34		36	37		39	40
	42			45			48		50
51		53			56		58		
	62				66		68		70
71		73		75		77		79	80
81			84					89	90
	92		94				98		100




Fyll i talen som saknas i talrutan.



110	120				160			190	
		230					280		300
			340			370			
	420		440		460				500
		530		550			580		
610			640		660				700
	720			750	760				800
810			840			870		890	
		930			960				



MARINAS KLASSRUM



marinasklassrum@gmail.com

Marinas_klassrum

Tack för att du har laddat ner mitt material.

- Det är tillåtet att använda mitt material för privat bruk och enskilda klassuppsättningar.
- Vill du dela med dig av materialet till kollegor ber jag dig att hänvisa till min sida på skolmagi.se
- Inspireras av materialet men du får inte bearbeta eller ändra i materialet.
- Du får inte använda materialet eller bilderna för att sälja det vidare.

Hoppas att du får användning av detta i din undervisning.

Bilderna har jag köpt från
[Kate Hadfield Designs](#)



KATE HADFIELD
DESIGNS

kimberly
geswein
fonts

KG