


Mitt mattehäfte



Talföljder

Fyll i talen som fattas



9									18
---	--	--	--	--	--	--	--	--	----

20									29
----	--	--	--	--	--	--	--	--	----

32									41
----	--	--	--	--	--	--	--	--	----

44									53
----	--	--	--	--	--	--	--	--	----

12									21
----	--	--	--	--	--	--	--	--	----

63									72
----	--	--	--	--	--	--	--	--	----



Storleksordna

Börja med det minsta talet.

8	9	7	6
---	---	---	---

--	--	--	--

12	14	13	11
----	----	----	----

--	--	--	--

22	19	21	20
----	----	----	----

--	--	--	--

36	33	34	35
----	----	----	----


--	--	--	--

55	57	56	58
----	----	----	----

--	--	--	--

Före och efter

Fyll i talen som saknas.



	7	
--	---	--

	9	
--	---	--

	15	
--	----	--

	23	
--	----	--

	19	
--	----	--

	35	
--	----	--

	29	
--	----	--


	41	
--	----	--

	57	
--	----	--


	60	
--	----	--

Hundraruta

Fyll i siffrorna som saknas.



1		3					8		
	12			15					20
			24			27			
31									
		43			46			49	
	52			55					
			64				68		
71									80
					86				
	92					97			



Talmönster

Fyll i talmönstren.

2	4				
---	---	--	--	--	--

5	10				
---	----	--	--	--	--

10	20				
----	----	--	--	--	--

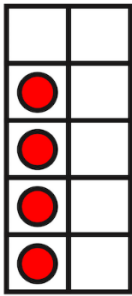

10	8				
----	---	--	--	--	--

--	--	--	--	--	--

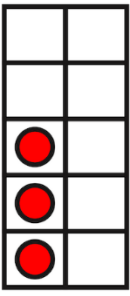


Hitta på ett eget mönster

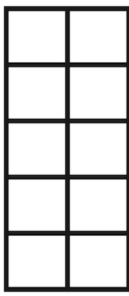
Addition



+

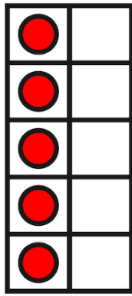


=

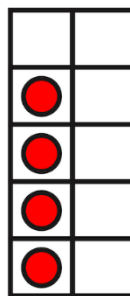


+

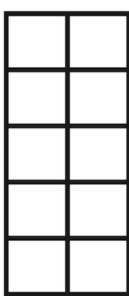
=



+

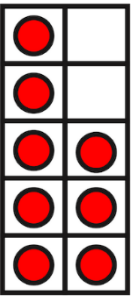


=



+

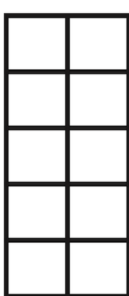
=



+




=



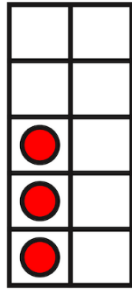
+

=


Addition



+

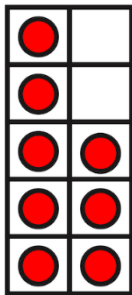


=

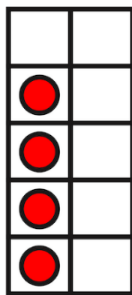


+


=



+




=




+


=



+




=

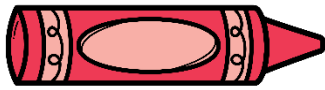


+


=












Udda och jämna tal



= Jämna





= Udda

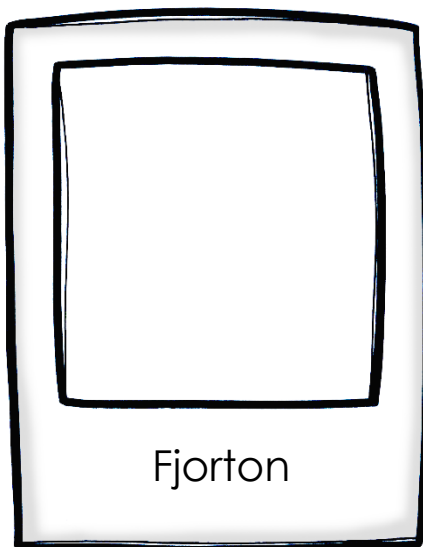


Talord


Läs och skriv siffran.



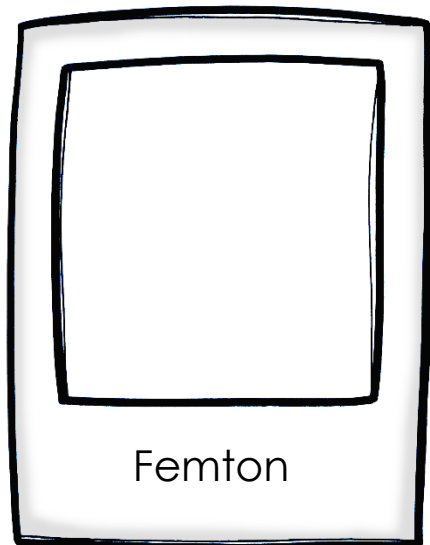
Åtta



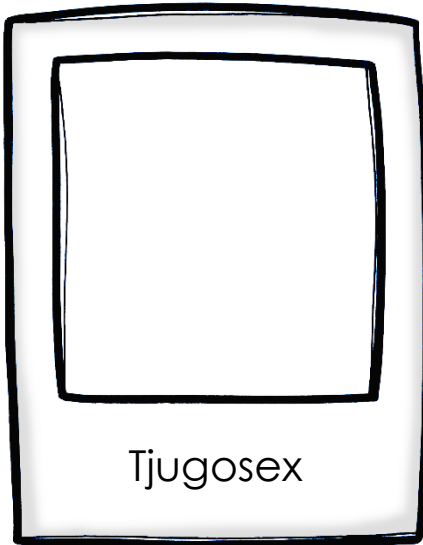
Fjorton



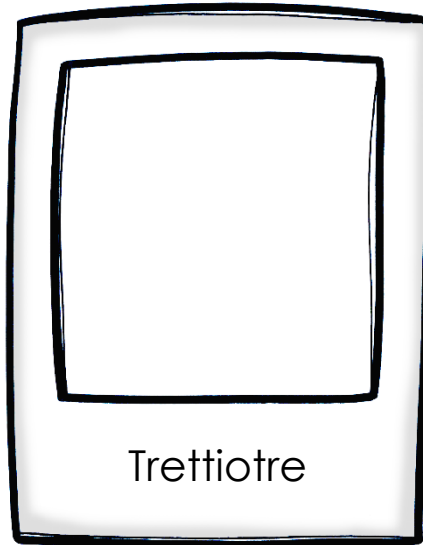
Tjugo




Femton




Tjugosex




Trettiotre




Tjuogoett



Arton

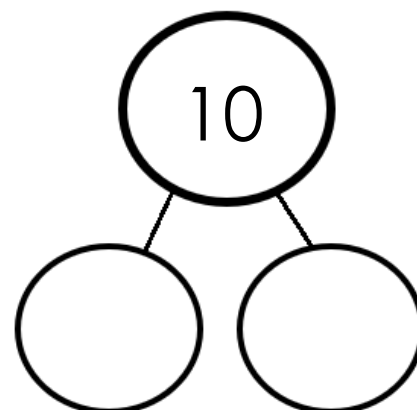
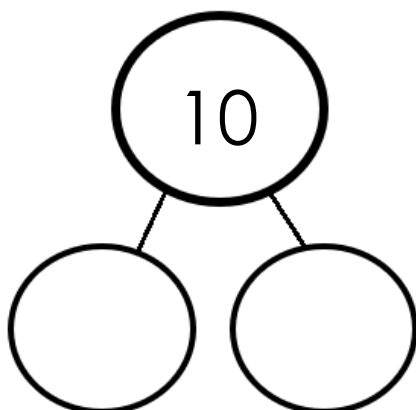
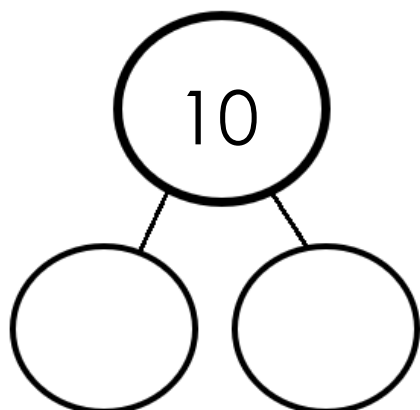
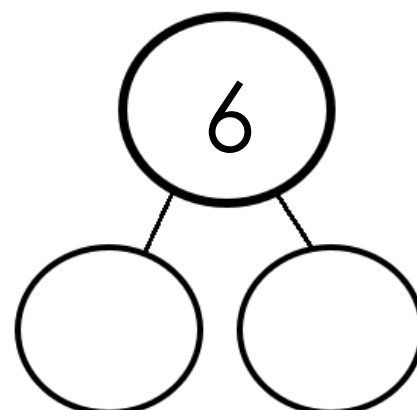
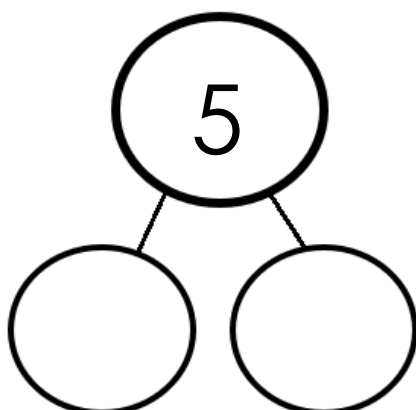
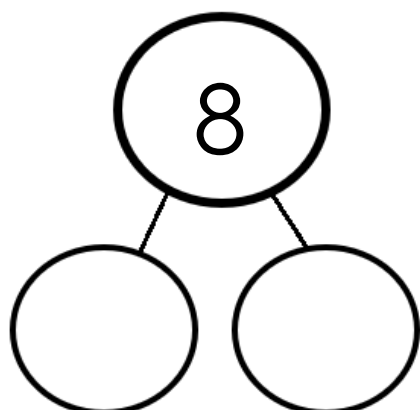
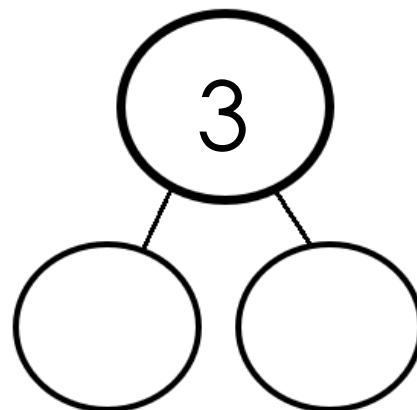
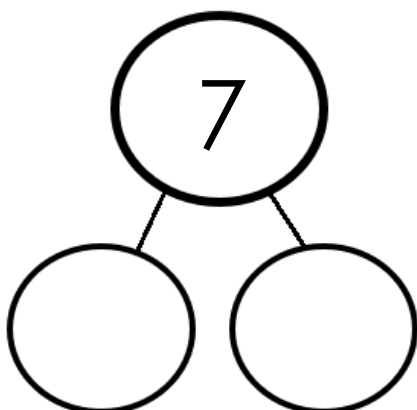
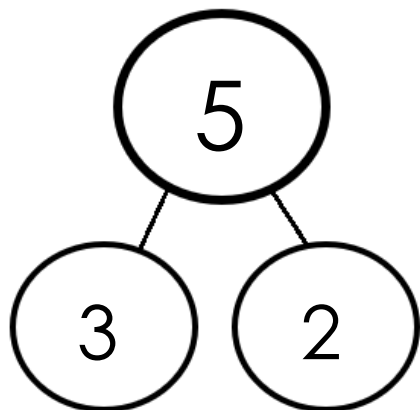


Femtio




Talkamrater

Dela upp talen.



Addition

Vilket tal saknas?




$$\boxed{4} + \boxed{} = \boxed{5}$$

$$\boxed{6} + \boxed{} = \boxed{8}$$

$$\boxed{} + \boxed{4} = \boxed{7}$$

$$\boxed{2} + \boxed{} = \boxed{5}$$



Addition

Vilket tal saknas?



$$\square + 5 = 10$$

$$6 + \square = 9$$

$$2 + \square = 10$$

$$\square + 3 = 6$$

Räknehändelser



Det är _____ stora grodor.

Det är _____ små grodor.

_____ + _____ = _____

Det är sammanlagt _____ grodor.




Det är _____ rosa klubbor.

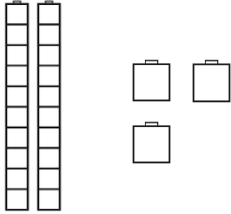
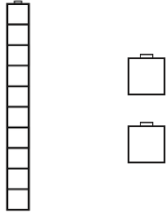
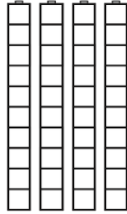
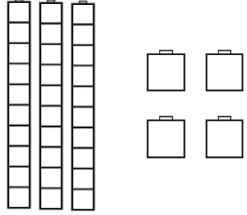
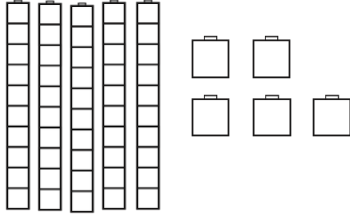
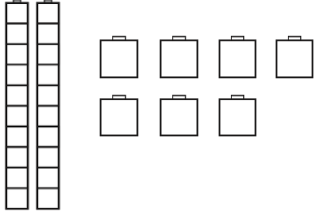
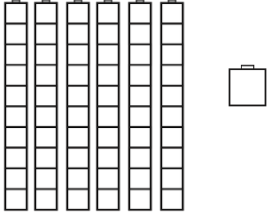
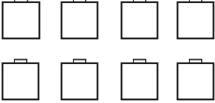
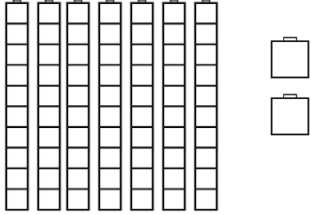
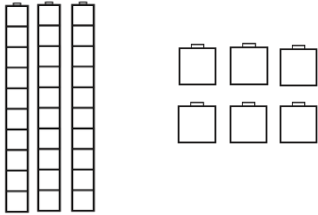
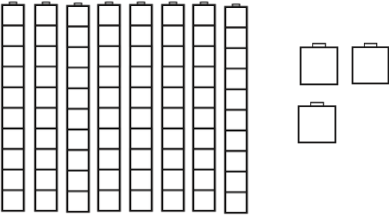
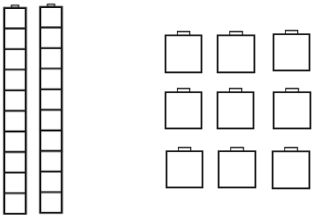
Det är _____ blå klubbor.

_____ + _____ = _____

Det är sammanlagt _____ klubbor.

Tiotal och ental



 <p>__ Tiotal __ Ental Totalt ____</p>	 <p>__ Tiotal __ Ental Totalt ____</p>	 <p>__ Tiotal __ Ental Totalt ____</p>
 <p>__ Tiotal __ Ental Totalt ____</p>	 <p>__ Tiotal __ Ental Totalt ____</p>	 <p>__ Tiotal __ Ental Totalt ____</p>
 <p>__ Tiotal __ Ental Totalt ____</p>	 <p>__ Tiotal __ Ental Totalt ____</p>	 <p>__ Tiotal __ Ental Totalt ____</p>
 <p>__ Tiotal __ Ental Totalt ____</p>	 <p>__ Tiotal __ Ental Totalt ____</p>	 <p>__ Tiotal __ Ental Totalt ____</p>

Tack för att du laddat ner mitt material!

Jag hoppas materialet
kommer till användning
i ditt klassrum!



Om du har några frågor, funderingar
eller önskemål är du välkommen att maila
janinasklassrum@gmail.com

Clip art credits

