




# Fiska EFTER TALET

HITTA TALET FÖR VARJE FISK.  
SAMMA FISK HAR ALLTID SAMMA VÄRDE.

 $+$  $= ?$



# Fiska EFTER TALET

SKANNA QR-KODEN FÖR ATT KOMMA TILL  
ÖVNINGARNA. ANVÄND SVARSHÄFTET FÖR ATT  
SKRIVA NER DINA SVAR.



# Fisken EFTER TALET

1


$$+ = 2$$


$$+ = 4$$


$$+ = \underline{\quad}$$

@frokaweggio

# Fisken EFTER TALET

2


$$+ = 8$$


$$+ = 16$$



$$+ = \underline{\quad}$$


@frokaweggio

# Fisken EFTER TALET

3


$$+ = 2$$



$$+ = 3$$


$$+ = \underline{\quad}$$

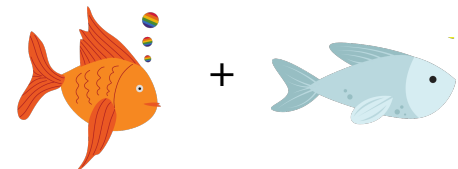
@frokaweggio

# Fisken EFTER TALET

4


$$+ = 10$$



$$+ = 20$$

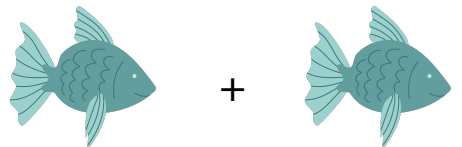

$$+ = \underline{\quad}$$


@frokaweggio

# Fiska EFTER TALET

5


$$+ = 6$$


$$+ = 12$$


$$+ = \underline{\quad}$$


@frokvarreggio

# Fiska EFTER TALET

6


$$+ = 12$$


$$+ = 14$$


$$+ = \underline{\quad}$$

@frokvarreggio

# Fiska EFTER TALET

7


$$+ = 8$$



$$+ = 5$$



$$+ = \underline{\quad}$$

@frokvarreggio

# Fiska EFTER TALET

8


$$+ = 10$$



$$+ = 11$$



$$+ = \underline{\quad}$$


@frokvarreggio

# Fisken EFTER TALET

9


$$+ = 4$$


$$+ = 7$$



$$+ = \underline{\quad}$$


@frokawreggio

# Fisken EFTER TALET

10


$$+ = 6$$



$$+ = 10$$


$$+ = \underline{\quad}$$

@frokawreggio

# Fisken EFTER TALET

11


$$+ = 4$$

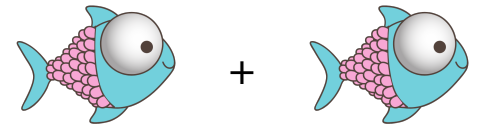

$$+ = 8$$



$$+ = \underline{\quad}$$


@frokawreggio

# Fisken EFTER TALET

12


$$+ = 10$$


$$+ = 15$$


$$+ = \underline{\quad}$$

@frokawreggio

# Fiska EFTER TALET

13

@frokaweggio


$$\text{Yellow striped fish} + \text{Yellow striped fish} = 12$$

$$\text{Yellow spotted fish} + \text{Yellow spotted fish} = 16$$

$$\text{Yellow spotted fish} + \text{Yellow striped fish} = \underline{\quad}$$

# Fiska EFTER TALET

14

@frokaweggio


$$\text{Black and white striped fish} + \text{Black and white striped fish} = 12$$


$$\text{Red fish} + \text{Red fish} = 20$$

$$\text{Black and white striped fish} + \text{Red fish} = \underline{\quad}$$

# Fiska EFTER TALET

15

@frokaweggio


$$\text{Purple fish} + \text{Purple fish} = 14$$


$$\text{Green fish} + \text{Green fish} = 20$$

$$\text{Green fish} + \text{Purple fish} = \underline{\quad}$$

# Fiska EFTER TALET

16

@frokaweggio


$$\text{Pink fish} + \text{Pink fish} = 14$$

$$\text{Blue starfish} + \text{Blue starfish} = 18$$

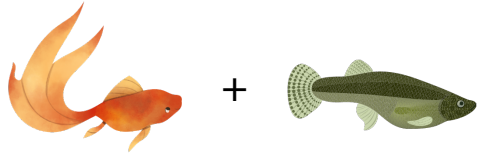
$$\text{Pink fish} + \text{Blue starfish} = \underline{\quad}$$

# Fisken EFTER TALET

17


$$+ = 16$$



$$+ = 18$$


$$+ = \underline{\quad}$$


@frokaweggio

# Fisken EFTER TALET

18


$$+ = 16$$


$$+ = 22$$


$$+ = \underline{\quad}$$

@frokaweggio

# Fisken EFTER TALET

19


$$+ = 18$$


$$+ = 10$$


$$+ = \underline{\quad}$$


@frokaweggio

# Fisken EFTER TALET

20


$$+ = 18$$


$$+ = 20$$


$$+ = \underline{\quad}$$

@frokaweggio



# Fisken EFTER TALET

21

@frokawreggio

 $+$  $= 20$

 $+$  $= 18$

 $+$  $= \underline{\quad}$

# Fisken EFTER TALET

22

@frokawreggio

 $+$  $= 24$





 $+$  $= 12$



 $+$  $= \underline{\quad}$



# Fisken EFTER TALET

23

@frokawreggio

 $+$  $= 22$





 $+$  $= 18$



 $+$  $= \underline{\quad}$

# Fisken EFTER TALET

24


@frokawreggio

 $+$  $= 22$

 $+$  $= 20$

 $+$  $= \underline{\quad}$





# Fiska EFTER TALET

---

FACIT & SVARSHÄFTE

# Fisken EFTER TALET

1


$$+ = 2$$



$$+ = 4$$


$$+ = 3$$


@frokaweggio

# Fisken EFTER TALET

2


$$+ = 8$$


$$+ = 16$$



$$+ = 12$$

@frokaweggio

# Fisken EFTER TALET

3


$$+ = 2$$

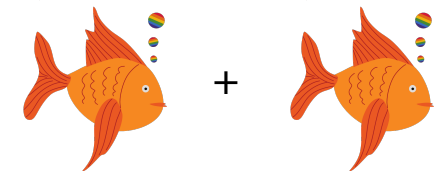

$$+ = 3$$


$$+ = 4$$


@frokaweggio

# Fisken EFTER TALET

4


$$+ = 10$$

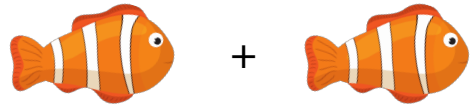

$$+ = 20$$

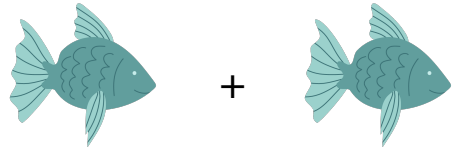

$$+ = 15$$

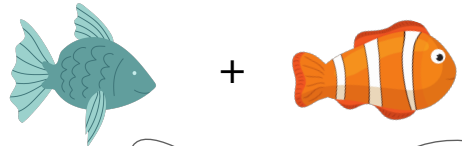
@frokaweggio

# Fisken EFTER TALET

5


$$+ = 6$$



$$+ = 12$$


$$+ = 9$$


@frokursreggio

# Fisken EFTER TALET

6


$$+ = 12$$

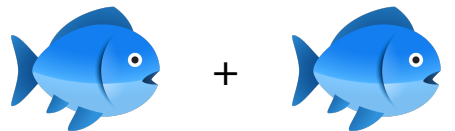

$$+ = 14$$


$$+ = 13$$

@frokursreggio

# Fisken EFTER TALET

7


$$+ = 8$$



$$+ = 5$$


$$+ = 2$$

@frokursreggio

# Fisken EFTER TALET

8


$$+ = 10$$



$$+ = 11$$



$$+ = 12$$


@frokursreggio

# Fiska EFTER TALET

9


$$+ = 4$$


$$+ = 7$$

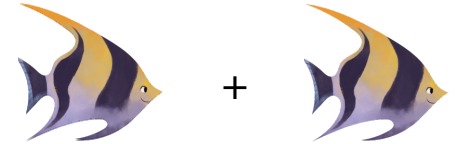

$$+ = 10$$


@frokawreggio

# Fiska EFTER TALET

10


$$+ = 6$$



$$+ = 10$$


$$+ = 8$$

@frokawreggio

# Fiska EFTER TALET

11


$$+ = 4$$



$$+ = 8$$



$$+ = 6$$

@frokawreggio

# Fiska EFTER TALET

12


$$+ = 10$$


$$+ = 15$$


$$+ = 20$$

@frokawreggio

# Fiska EFTER TALET

13


$$\text{Yellow striped fish} + \text{Yellow striped fish} = 12$$

$$\text{Yellow spotted fish} + \text{Yellow spotted fish} = 16$$

$$\text{Yellow spotted fish} + \text{Yellow striped fish} = 14$$

@frokaweggio

# Fiska EFTER TALET

14


$$\text{Black and white striped fish} + \text{Black and white striped fish} = 12$$


$$\text{Red fish} + \text{Red fish} = 20$$

$$\text{Black and white striped fish} + \text{Red fish} = 16$$

@frokaweggio

# Fiska EFTER TALET

15


$$\text{Purple fish} + \text{Purple fish} = 14$$


$$\text{Green fish} + \text{Green fish} = 20$$

$$\text{Green fish} + \text{Purple fish} = 17$$

@frokaweggio

# Fiska EFTER TALET

16


$$\text{Pink fish} + \text{Pink fish} = 14$$

$$\text{Blue starfish} + \text{Blue starfish} = 18$$

$$\text{Pink fish} + \text{Blue starfish} = 16$$

@frokaweggio

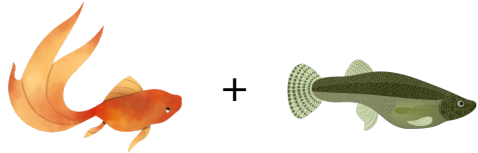
# Fisken EFTER TALET

17

@frokaweggio


$$+ = 16$$


$$+ = 18$$


$$+ = 17$$


# Fisken EFTER TALET

18

@frokaweggio


$$+ = 16$$


$$+ = 22$$


$$+ = 19$$

# Fisken EFTER TALET

19

@frokaweggio


$$+ = 18$$


$$+ = 10$$



$$+ = 14$$


# Fisken EFTER TALET

20

@frokaweggio


$$+ = 18$$


$$+ = 20$$


$$+ = 19$$

# Fisken EFTER TALET

21

@frokawreggio


$$+ + = 20$$


$$+ = 18$$


$$+ = 16$$

# Fisken EFTER TALET

22

@frokawreggio


$$+ = 24$$




$$+ = 12$$



$$+ = 18$$


# Fisken EFTER TALET

23

@frokawreggio


$$+ = 22$$




$$+ = 18$$

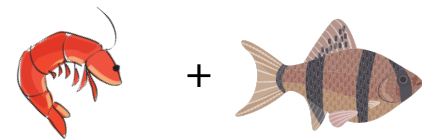

$$+ = 20$$

# Fisken EFTER TALET

24

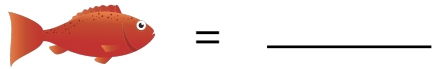
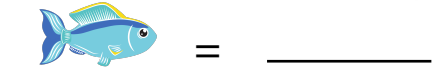
@frokawreggio


$$+ = 22$$


$$+ = 20$$

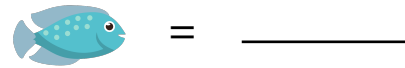
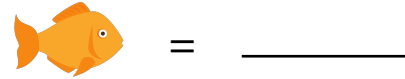

$$+ = 18$$

VILKET ÄR FISKENS VÄRDE? 1



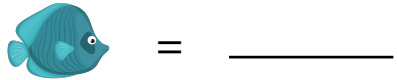
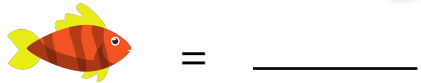
Svar: = \_\_\_\_\_

VILKET ÄR FISKENS VÄRDE? 2



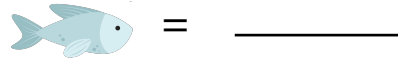
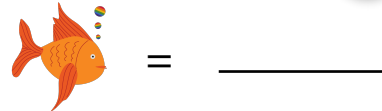
Svar: = \_\_\_\_\_

VILKET ÄR FISKENS VÄRDE? 3



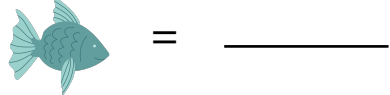
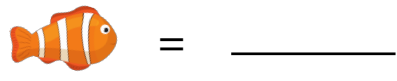
Svar: = \_\_\_\_\_

VILKET ÄR FISKENS VÄRDE? 4



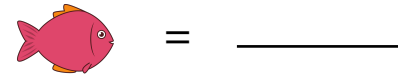
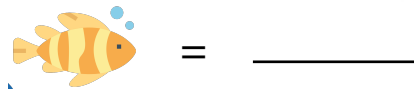
Svar: = \_\_\_\_\_

VILKET ÄR FISKENS VÄRDE? 5



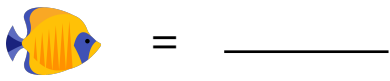
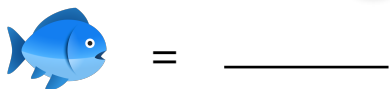
Svar: = \_\_\_\_\_

VILKET ÄR FISKENS VÄRDE? 6



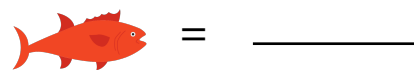
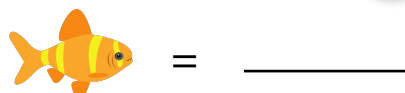
Svar: = \_\_\_\_\_

VILKET ÄR FISKENS VÄRDE? 7



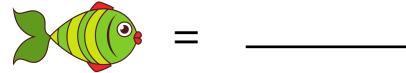
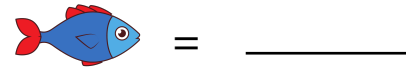
Svar: = \_\_\_\_\_

VILKET ÄR FISKENS VÄRDE? 8



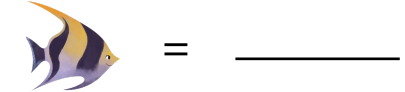
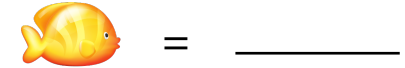
Svar: = \_\_\_\_\_

VILKET ÄR FISKENS VÄRDE? 9



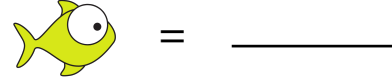
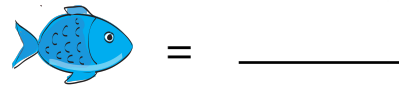
Svar: = \_\_\_\_\_

VILKET ÄR FISKENS VÄRDE? 10



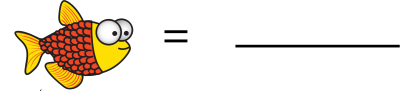
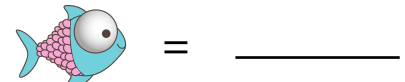
Svar: = \_\_\_\_\_

VILKET ÄR FISKENS VÄRDE? 11



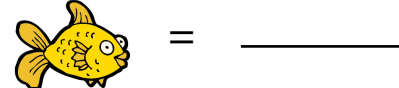
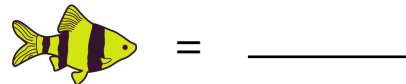
Svar: = \_\_\_\_\_

VILKET ÄR FISKENS VÄRDE? 12



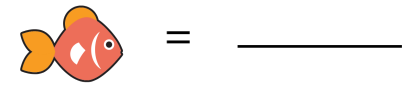
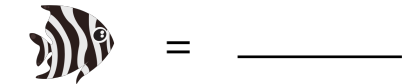
Svar: = \_\_\_\_\_

VILKET ÄR FISKENS VÄRDE? 13



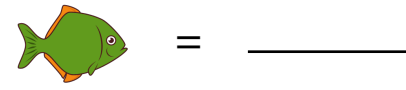
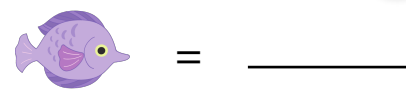
Svar: = \_\_\_\_\_

VILKET ÄR FISKENS VÄRDE? 14



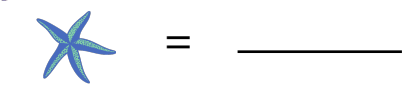
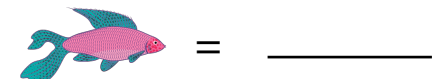
Svar: = \_\_\_\_\_

VILKET ÄR FISKENS VÄRDE? 15



Svar: = \_\_\_\_\_

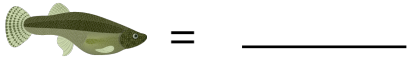
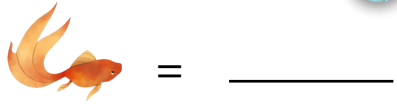
VILKET ÄR FISKENS VÄRDE? 16



Svar: = \_\_\_\_\_

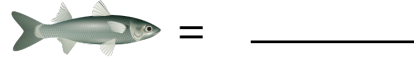
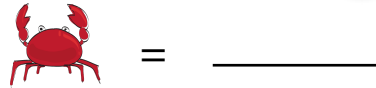


VILKET ÄR FISKENS VÄRDE? 17



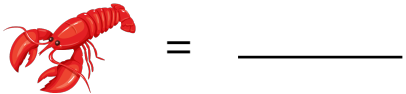
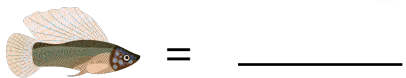
Svar: = \_\_\_\_\_

VILKET ÄR FISKENS VÄRDE? 18



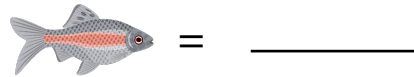
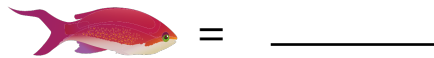
Svar: = \_\_\_\_\_

VILKET ÄR FISKENS VÄRDE? 19



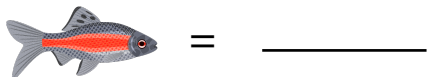
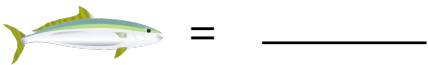
Svar: = \_\_\_\_\_

VILKET ÄR FISKENS VÄRDE? 20



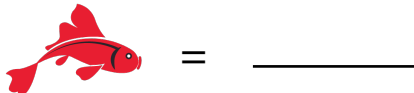
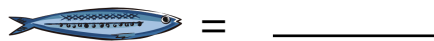
Svar: = \_\_\_\_\_

VILKET ÄR FISKENS VÄRDE? 21



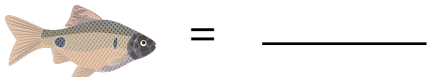
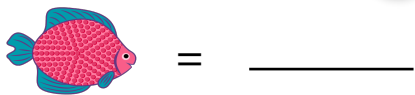
Svar: = \_\_\_\_\_

VILKET ÄR FISKENS VÄRDE? 22



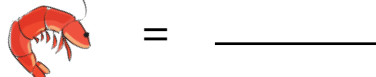
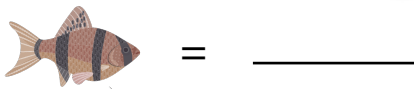
Svar: = \_\_\_\_\_

VILKET ÄR FISKENS VÄRDE? 23




Svar: = \_\_\_\_\_

VILKET ÄR FISKENS VÄRDE? 24



Svar: = \_\_\_\_\_



# Fiska EFTER TALET

## SVARSHÄFTE

NAMN: \_\_\_\_\_