



HITTA bråket


TAL I BRÅKFORM - HUR DE KAN BENÄMNAS OCH UTTRYCKAS.

KLIPP UT BILDERNA. HITTA RÄTT BILD OCH KLISTRA FAST DEN BREDVID DEN
BENÄMNING SOM BRÅKET VISAR.

HITTA bråket

Klipp ut bilderna. Hitta rätt bild och klistra fast den bredvid den benämning som bråket visar.

$$\frac{1}{3}$$



$$\frac{1}{6}$$




$$\frac{1}{12}$$



$$\frac{1}{7}$$




$$\frac{1}{4}$$



$$\frac{1}{2}$$




$$\frac{1}{9}$$



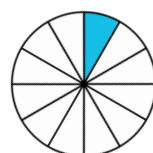
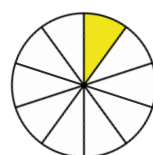
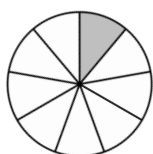
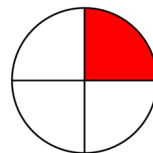
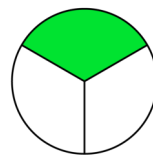
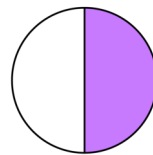
$$\frac{1}{8}$$



$$\frac{1}{5}$$




$$\frac{1}{10}$$



HITTA bråket

Klipp ut bilderna. Hitta rätt bild och klistra fast den bredvid den benämning som bråket visar.


$$\frac{8}{12}$$



$$\frac{3}{5}$$



$$\frac{3}{8}$$



$$\frac{3}{4}$$




$$\frac{4}{6}$$



$$\frac{2}{3}$$




$$\frac{4}{9}$$



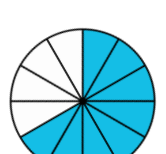
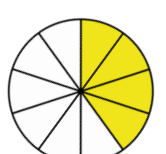
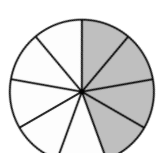
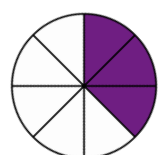
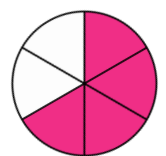
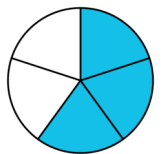
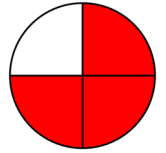

$$\frac{2}{7}$$



$$\frac{2}{2}$$




$$\frac{4}{10}$$



HITTA bråket

Klipp ut bilderna. Hitta rätt bild och klistra fast den bredvid den benämning som bråket visar.


$$\frac{5}{7}$$



$$\frac{6}{11}$$



$$\frac{2}{10}$$



$$\frac{1}{6}$$




$$\frac{3}{5}$$



$$\frac{3}{8}$$




$$\frac{4}{12}$$



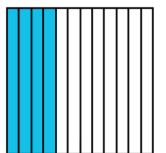
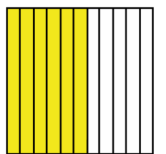
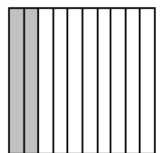
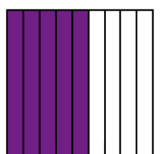
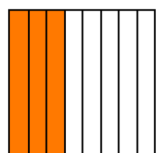
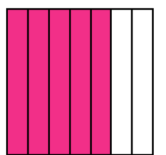
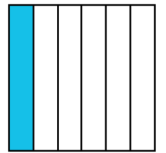
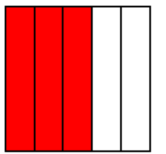

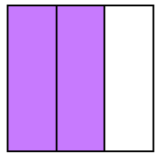
$$\frac{4}{4}$$



$$\frac{2}{3}$$




$$\frac{5}{9}$$



HITTA bråket

Klipp ut bilderna. Hitta rätt bild och klistra fast den bredvid den benämning som bråket visar.


$$\frac{4}{8}$$



$$\frac{1}{1}$$



$$\frac{7}{10}$$



$$\frac{2}{3}$$



$$\frac{2}{5}$$



$$\frac{5}{7}$$



$$\frac{1}{2}$$



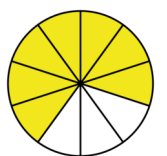
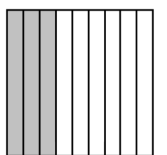
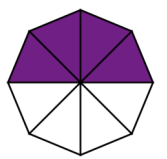
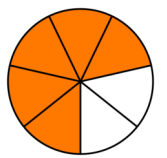
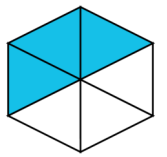
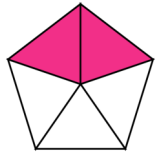

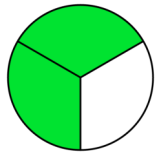
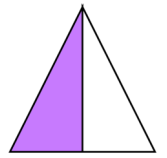
$$\frac{3}{4}$$



$$\frac{3}{6}$$



$$\frac{3}{9}$$



Fröken Reggio

Inspiration till det här materialet har jag hämtat från bl.a. egna erfarenheter, Instagram och Teachers Pay Teachers.

De bilder jag använt är från Smart as a Fox och fonterna jag använt har jag licens för.

Jag finns på Facebook och Instagram under samma namn och jag delar mitt material på Skolmagi.nu

Följ mig gärna för inspiration, idéer och uppdatering om mitt material.

Skolmagi.nu
Skolan -där magi sker

